




Subtraction Word Problems to 15


1) Clifton has 9 apples in a fruit basket and Zachary ate 4 apples from the basket. How many apples are left in the basket?

Ans:



2) 4 strawberries were found in a tree. A few days later, 2 strawberries were rotten. How many strawberries are left?

Ans:




3) Adam has 14 coins and he gives Alfredo 4 coins. How many coins does Adam have?

Ans:



4) Brandon has 6 pineapples and he gifted Byron 3 pineapples. How many pineapples are left in Brandon's hand?

Ans:



5) Nathan has 6 piece of cake and Dale has 4 piece of cake. How many more cake does Natha have?

Ans:

