

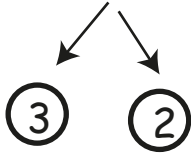


Making 10 to Subtract Using Number Line

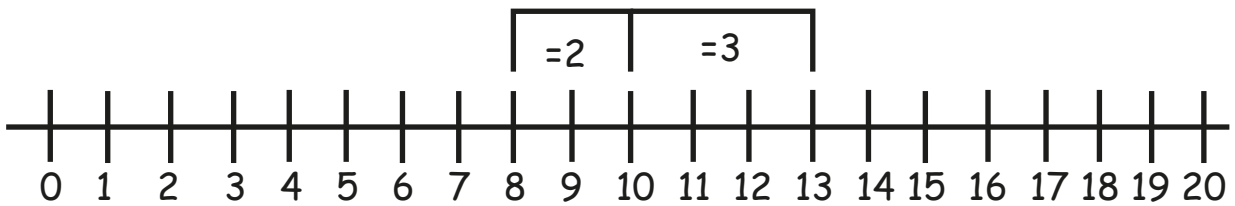
Break apart the subtrahend to make a ten. Find the differences.

1)

$$13 - 5 = 8$$

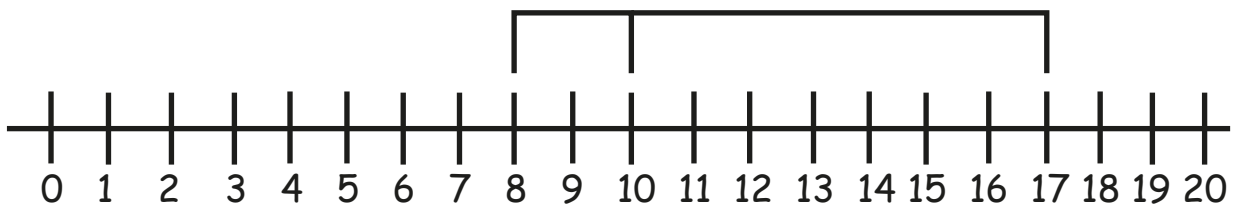
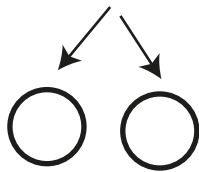


$$13 - 3 = 10 - 2 = 8$$



2)

$$17 - 9 = 8$$



3)

$$15 - 6 = 9$$

