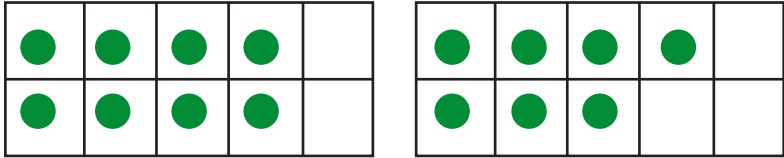
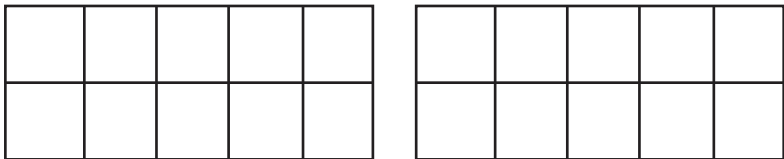
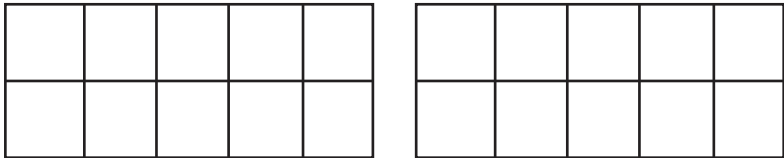
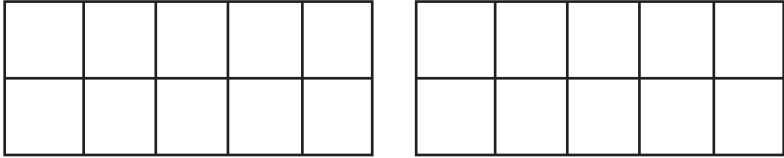
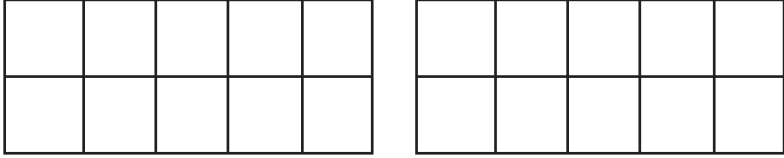
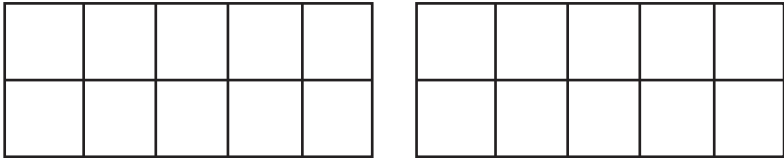




Adding Double Minus One with Ten Frames

Use Ten Frames to solve the problems

	TEN FRAME	DOUBLE	DOUBLE-1
1)		$4 + 4 = \underline{\quad 8 \quad}$	$4 + 3 = \underline{\quad 7 \quad}$
2)		$2 + 2 = \underline{\quad \quad}$	$2 + 1 = \underline{\quad \quad}$
3)		$6 + 6 = \underline{\quad \quad}$	$6 + 5 = \underline{\quad \quad}$
4)		$3 + 3 = \underline{\quad \quad}$	$3 + 2 = \underline{\quad \quad}$
5)		$7 + 7 = \underline{\quad \quad}$	$7 + 6 = \underline{\quad \quad}$
6)		$5 + 5 = \underline{\quad \quad}$	$5 + 4 = \underline{\quad \quad}$