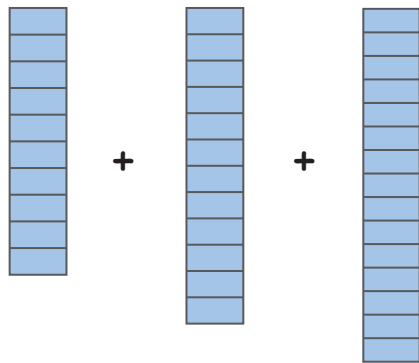


Name :

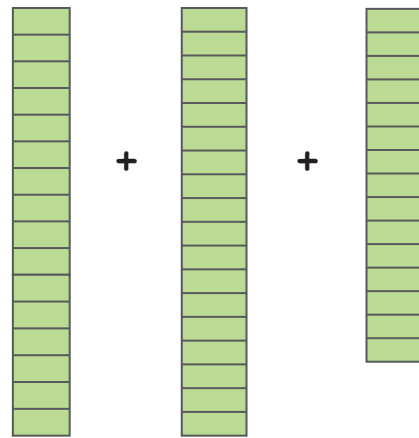
Date :



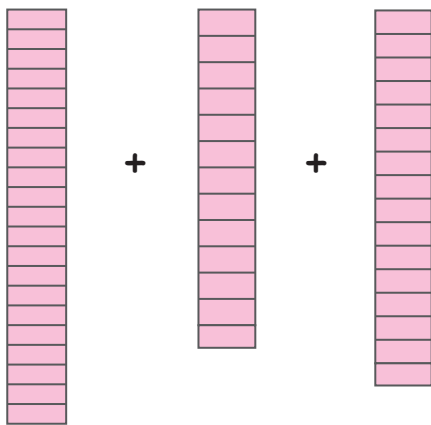
# Counting Blocks and Identifying Additions with 3 Addends



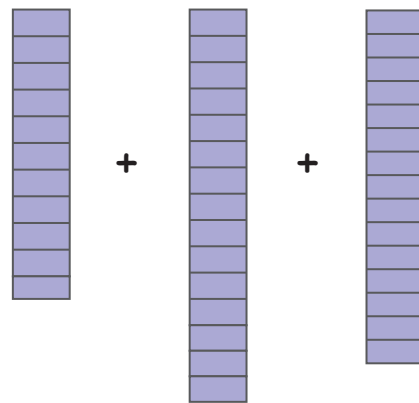
$$\underline{10} + \underline{12} + \underline{15} = \underline{37}$$



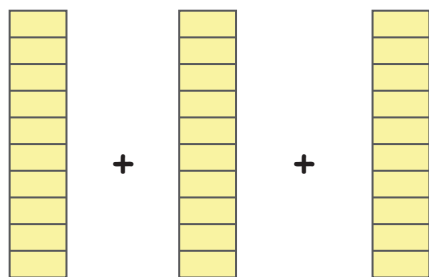
$$\underline{\quad} + \underline{\quad} + \underline{\quad} = \underline{\quad}$$



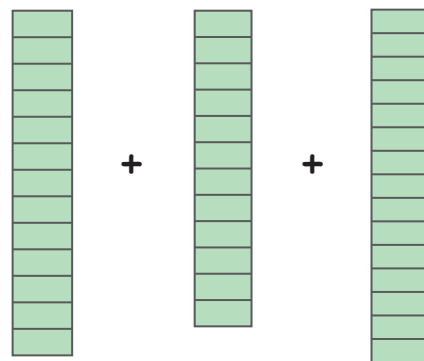
$$\underline{\quad} + \underline{\quad} + \underline{\quad} = \underline{\quad}$$



$$\underline{\quad} + \underline{\quad} + \underline{\quad} = \underline{\quad}$$



$$\underline{\quad} + \underline{\quad} + \underline{\quad} = \underline{\quad}$$



$$\underline{\quad} + \underline{\quad} + \underline{\quad} = \underline{\quad}$$

