



Name :

Date :

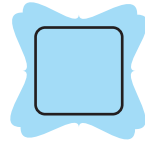
# How Many Tens and Ones Worksheet



Adding tens and ones and filling blanks.




= 4 tens and 5 ones.




= 5 tens and 1 ones.



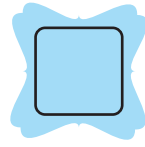
= 5 tens and 5 ones.




= 4 tens and 6 ones.



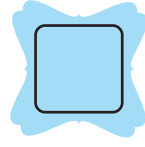
= 5 tens and 7 ones.



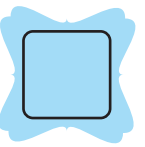
= 5 tens and 3 ones.




= 4 tens and 7 ones.



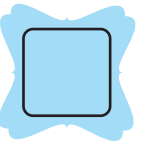
= 6 tens and 9 ones.



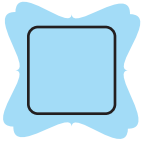
= 7 tens and 8 ones.



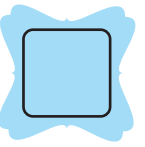
= 6 tens and 8 ones.



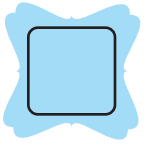
= 5 tens and 2 ones.



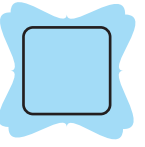
= 4 tens and 8 ones.



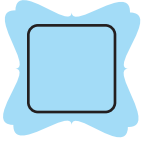
= 8 tens and 3 ones.



= 7 tens and 1 ones.



= 4 tens and 9 ones.



= 2 tens and 4 ones.

