



Name :

Date :

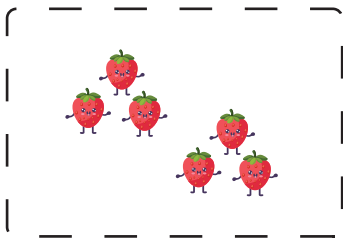
# How Many Tens and Ones Worksheet



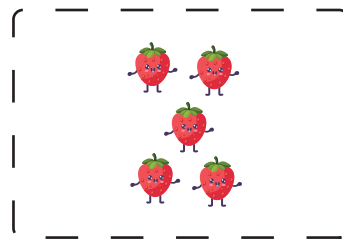
Counting pictures for finding tens and ones.



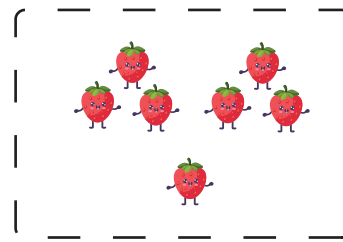
$$3 \text{ tens} + \underline{3} \text{ ones} = \boxed{33}$$




$$2 \text{ tens} + \underline{\quad} \text{ ones} = \boxed{\quad}$$



$$1 \text{ tens} + \underline{\quad} \text{ ones} = \boxed{\quad}$$



$$1 \text{ tens} + \underline{\quad} \text{ ones} = \boxed{\quad}$$



$$2 \text{ tens} + \underline{\quad} \text{ ones} = \boxed{\quad}$$

