


Name :

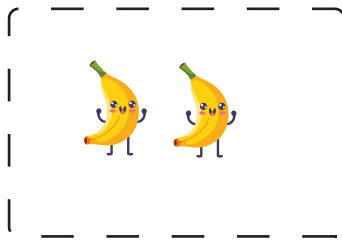
Date :

How Many Tens and Ones Worksheet


Counting pictures for finding tens and ones.




$4 \text{ tens} + __ \text{ ones} =$




$6 \text{ tens} + __ \text{ ones} =$



$4 \text{ tens} + __ \text{ ones} =$



$5 \text{ tens} + __ \text{ ones} =$



$6 \text{ tens} + __ \text{ ones} =$

