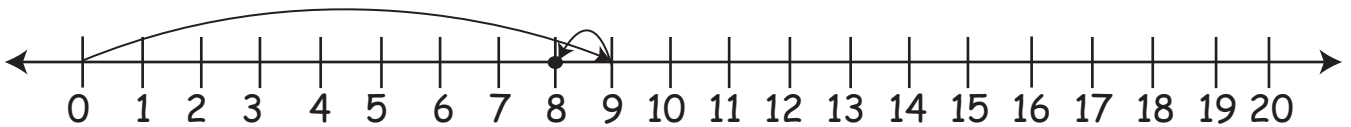




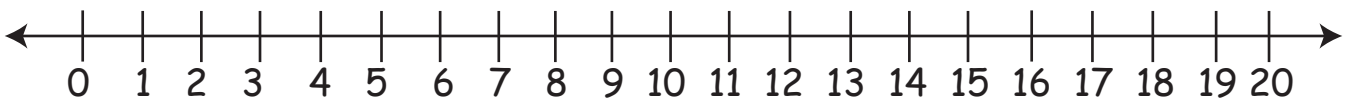
## Subtracting 0 and 1 Using the Number Line

Use the number line to subtraction:

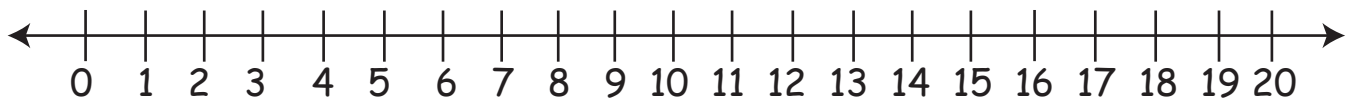
1.  $9 - 1 = 8$



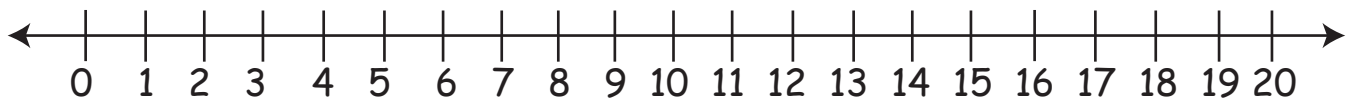
2.  $1 - 0 =$



3.  $7 - 1 =$



4.  $4 - 0 =$



5.  $8 - 1 =$

