




## Worksheet on Subtraction from 20 by Crossing out Objects

Cross through the numbers of candies are subtracting to find the answer:


1.  $20 - 8 = 12$




6.  $20 - 10 =$




2.  $20 - 4 =$




7.  $20 - 16 =$




3.  $20 - 17 =$




8.  $20 - 13 =$



4.  $20 - 2 =$



9.  $20 - 15 =$



5.  $20 - 9 =$



10.  $20 - 18 =$

