





Worksheet on Subtraction from 20 by Crossing out Objects

Cross through the numbers of bananas are subtracting to find the answer:


1. $20 - 13 =$




6. $20 - 16 =$




2. $20 - 9 =$




7. $20 - 14 =$




3. $20 - 11 =$




8. $20 - 2 =$



4. $20 - 5 =$



9. $20 - 7 =$



5. $20 - 18 =$



10. $20 - 10 =$

