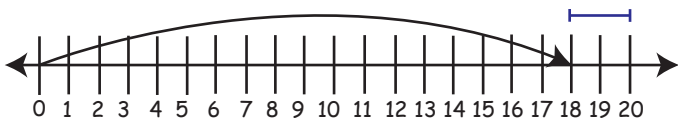




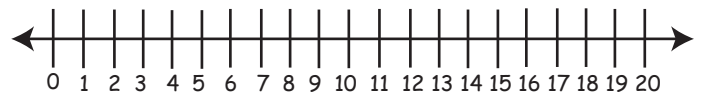
## Worksheet on Subtraction from 20 Using Number Line

Use the number line to subtract from 20:

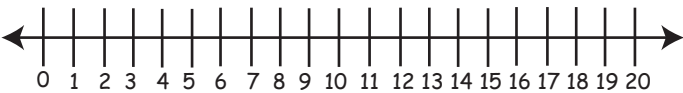
1.  $20 - 18 = 2$



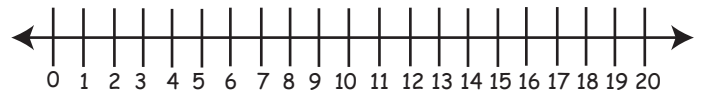
6.  $20 - 11 =$



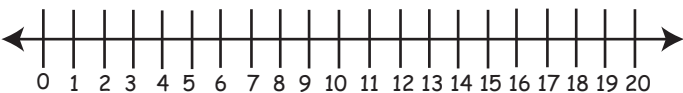
2.  $20 - 4 =$



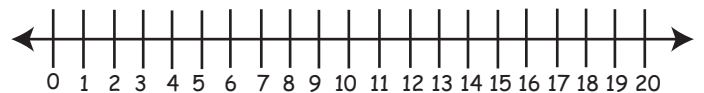
7.  $20 - 6 =$



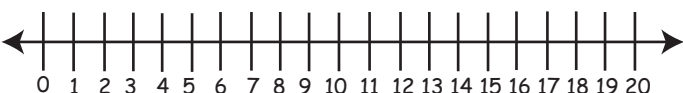
3.  $20 - 7 =$



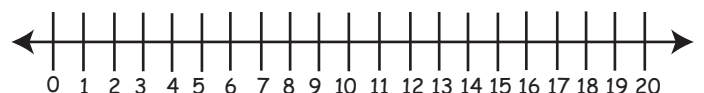
8.  $20 - 10 =$



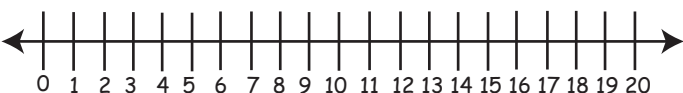
4.  $20 - 12 =$



9.  $20 - 15 =$



5.  $20 - 9 =$



10.  $20 - 13 =$

