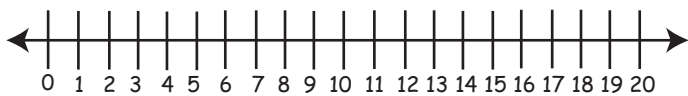




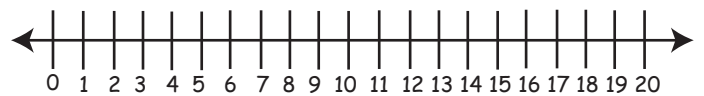
Worksheet on Subtraction from 20 Using Number Line

Use the number line to subtract from 20:

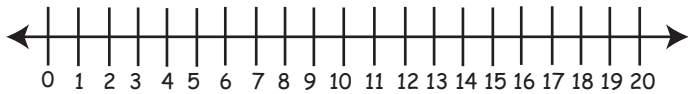
1. $20 - 8 =$



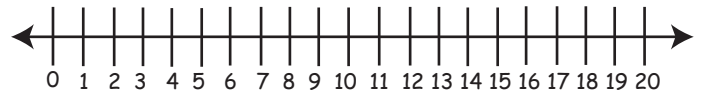
6. $20 - 12 =$



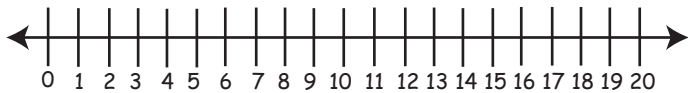
2. $20 - 14 =$



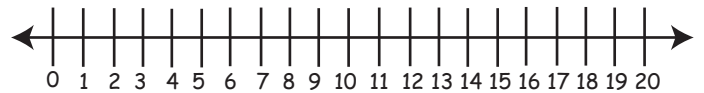
7. $20 - 16 =$



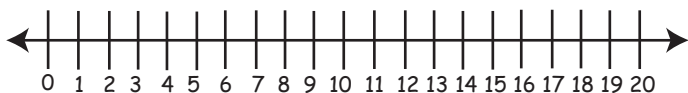
3. $20 - 6 =$



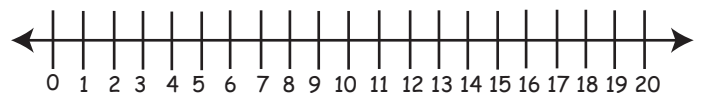
8. $20 - 1 =$



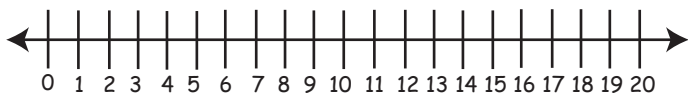
4. $20 - 3 =$



9. $20 - 19 =$



5. $20 - 20 =$



10. $20 - 17 =$

