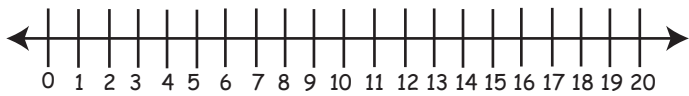




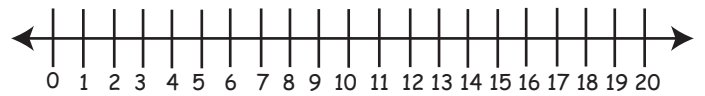
Worksheet on Subtraction from 20 Using Number Line

Use the number line to subtract from 20:

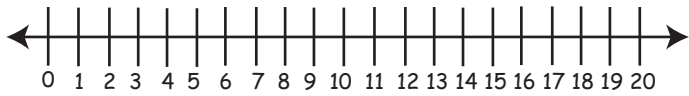
1. $20 - 13 =$



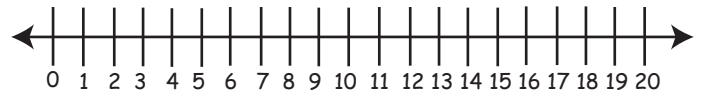
6. $20 - 19 =$



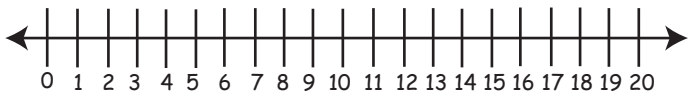
2. $20 - 9 =$



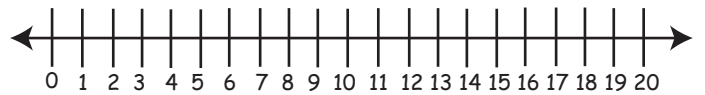
7. $20 - 16 =$



3. $20 - 17 =$



8. $20 - 14 =$



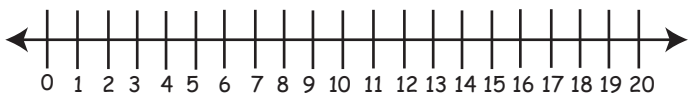
4. $20 - 11 =$



9. $20 - 15 =$



5. $20 - 4 =$



10. $20 - 20 =$

