
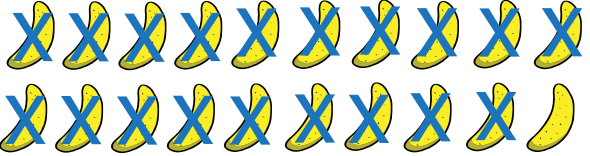
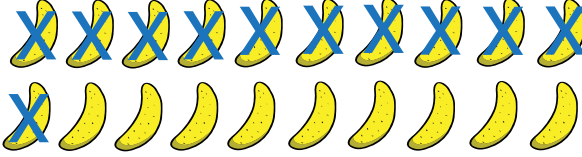



Worksheet on Subtracting from 20 and Circling Correct Answer

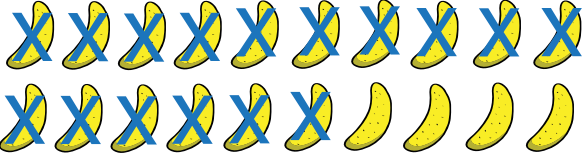
Circle the correct subtraction that matches the picture:


1. 
 $20-6$ $20-15$ $20-12$ $20-14$


6. 
 $20-16$ $20-15$ $20-19$ $20-14$


2. 
 $20-11$ $20-9$ $20-12$ $20-14$


7. 
 $20-6$ $20-5$ $20-12$ $20-3$


3. 
 $20-16$ $20-15$ $20-17$ $20-19$

8. 
 $20-6$ $20-10$ $20-12$ $20-9$

4. 
 $20-11$ $20-16$ $20-12$ $20-13$

9. 
 $20-16$ $20-15$ $20-10$ $20-14$

5. 
 $20-6$ $20-8$ $20-12$ $20-10$

10. 
 $20-17$ $20-15$ $20-19$ $20-12$