










Addition Number Sentence

Color the number of circles to make the total and fill the gap with correct missing number

Number Sentence	Color Correct Number of Circles
1) $1 + \underline{\hspace{2cm}} = 4$	
2) $2 + \underline{\hspace{2cm}} = 8$	
3) $4 + \underline{\hspace{2cm}} = 8$	
4) $2 + \underline{\hspace{2cm}} = 5$	
5) $6 + \underline{\hspace{2cm}} = 7$	
6) $8 + \underline{\hspace{2cm}} = 9$	
7) $7 + \underline{\hspace{2cm}} = 10$	
8) $10 + \underline{\hspace{2cm}} = 15$	