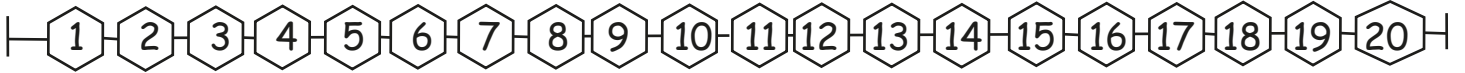


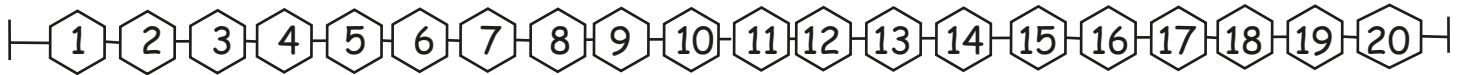


Subtract by Counting Back Up to 20

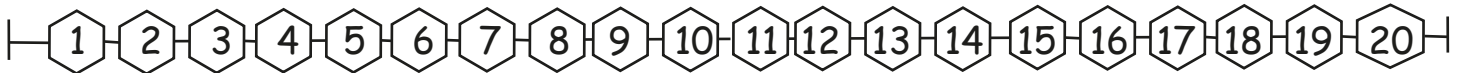
Subtract by counting back and write the answer.



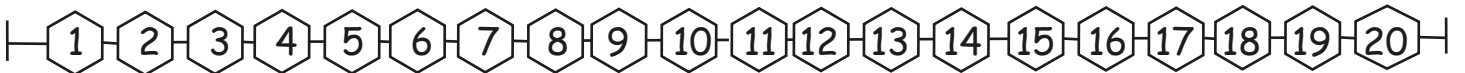
1) $15 - 8 = \square$



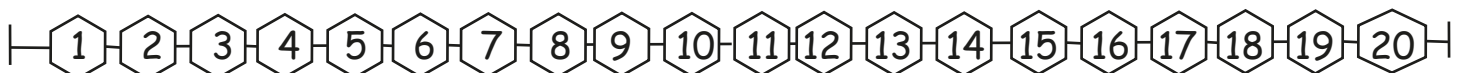
2) $14 - 6 = \square$



3) $16 - 12 = \square$



4) $18 - 7 = \square$



5) $19 - 5 = \square$