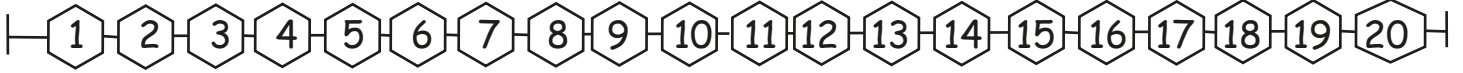


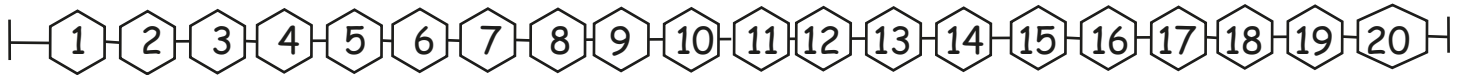


Subtract by Counting Back Up to 20

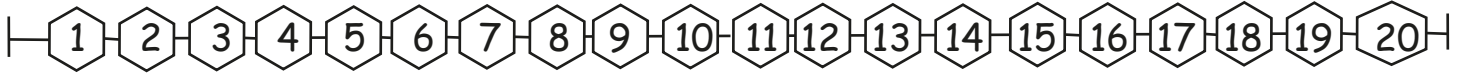
Subtract by counting back and write the answer.



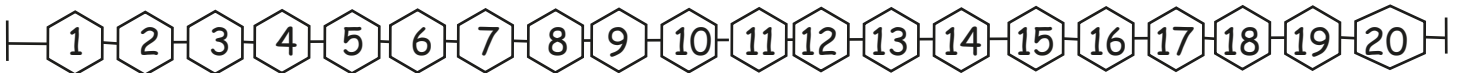
1) $20 - 13 = \square$



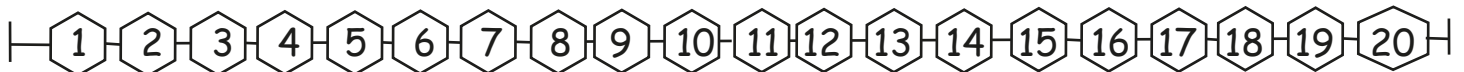
2) $10 - 7 = \square$



3) $18 - 2 = \square$



4) $15 - 10 = \square$



5) $14 - 8 = \square$