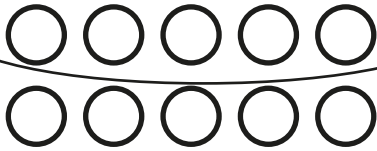




Subtraction Number Sentence

Circle the equation that describes how many balls will be left.
Write the answer.

1)

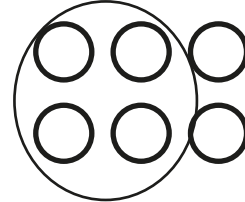


$$13 - 2 = \underline{11}$$

$$10 - 5 = \underline{5}$$

$$13 - 9 = \underline{4}$$

2)

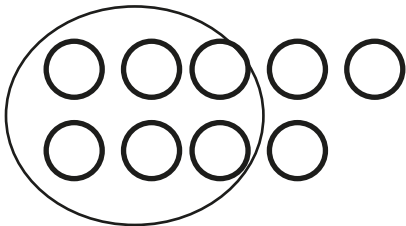


$$12 - 8 = \underline{\quad}$$

$$9 - 6 = \underline{\quad}$$

$$13 - 5 = \underline{\quad}$$

3)

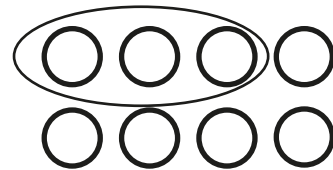


$$15 - 5 = \underline{\quad}$$

$$10 - 4 = \underline{\quad}$$

$$11 - 2 = \underline{\quad}$$

4)



$$14 - 2 = \underline{\quad}$$

$$14 - 11 = \underline{\quad}$$

$$12 - 5 = \underline{\quad}$$