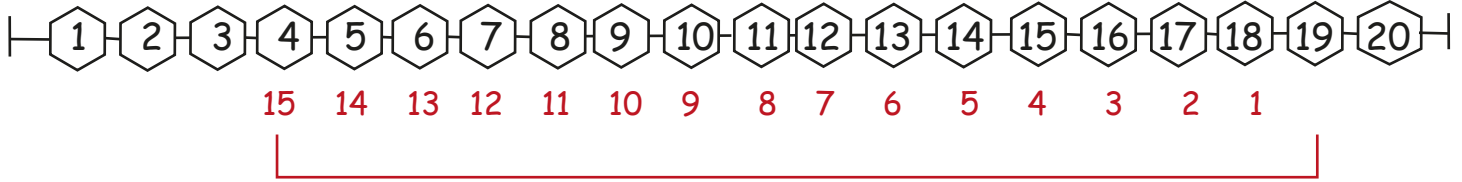


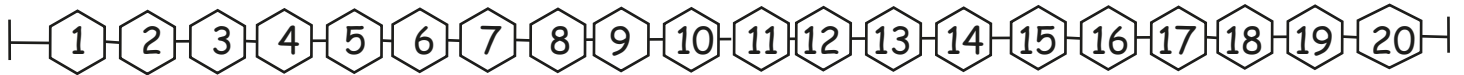


Subtract by Counting Back Up to 20

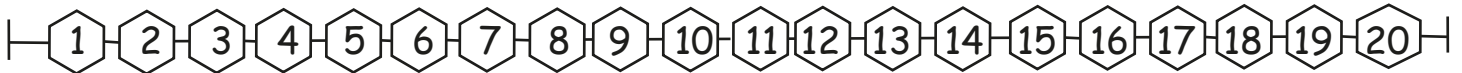
Subtract by counting back and write the answer.



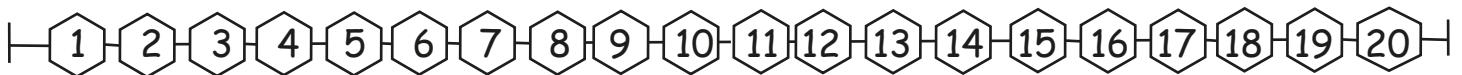
1) $19 - 15 = \boxed{4}$



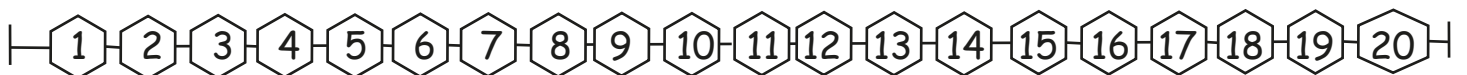
2) $12 - 7 = \boxed{}$



3) $9 - 2 = \boxed{}$



4) $7 - 1 = \boxed{}$



5) $13 - 10 = \boxed{}$