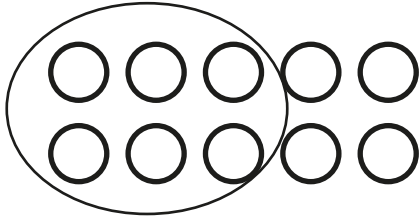




Subtraction Number Sentence

Circle the equation that describes how many balls will be left.
Write the answer.

1)

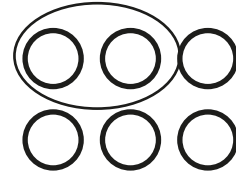


$$11 - 2 = \underline{\quad}$$

$$16 - 8 = \underline{\quad}$$

$$16 - 10 = \underline{\quad}$$

2)

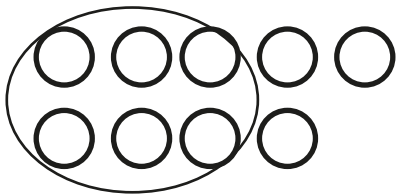


$$17 - 5 = \underline{\quad}$$

$$17 - 6 = \underline{\quad}$$

$$17 - 13 = \underline{\quad}$$

3)

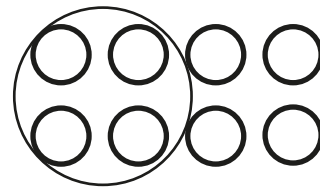


$$15 - 8 = \underline{\quad}$$

$$18 - 12 = \underline{\quad}$$

$$17 - 2 = \underline{\quad}$$

4)



$$12 - 2 = \underline{\quad}$$

$$13 - 9 = \underline{\quad}$$

$$17 - 7 = \underline{\quad}$$