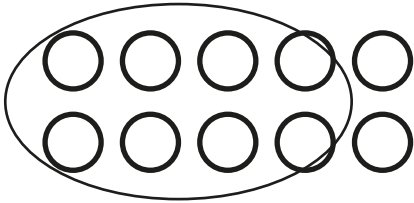




Subtraction Number Sentence

Circle the equation that describes how many balls will be left.
Write the answer.

1)




$$10 - 2 = \underline{\quad}$$

$$10 - 6 = \underline{\quad}$$

$$10 - 7 = \underline{\quad}$$

2)

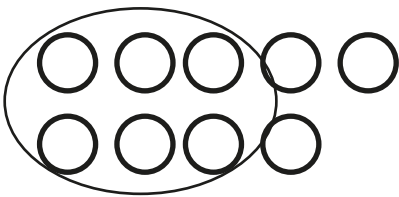


$$6 - 5 = \underline{\quad}$$

$$3 - 2 = \underline{\quad}$$

$$6 - 3 = \underline{\quad}$$

3)

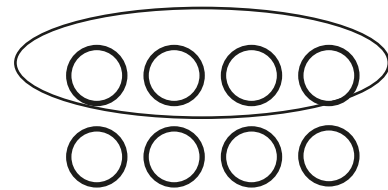


$$9 - 5 = \underline{\quad}$$

$$8 - 2 = \underline{\quad}$$

$$9 - 6 = \underline{\quad}$$

4)



$$8 - 1 = \underline{\quad}$$

$$5 - 2 = \underline{\quad}$$

$$5 - 1 = \underline{\quad}$$