



# Addition

## Number Sentence with Pictures


Count the stars in each group. Write the number in the box and write the sum in the last box.

1)




$$\boxed{2} + \boxed{3} = \boxed{5}$$

2)




$$\boxed{\phantom{00}} + \boxed{\phantom{00}} = \boxed{\phantom{00}}$$

3)



$$\boxed{\phantom{00}} + \boxed{\phantom{00}} = \boxed{\phantom{00}}$$

4)



$$\boxed{\phantom{00}} + \boxed{\phantom{00}} = \boxed{\phantom{00}}$$