




Addition

Number Sentence with Pictures


Count the stars in each group. Write the number in the box and write the sum in the last box.

1)



$$\boxed{} + \boxed{} = \boxed{}$$

2)




$$\boxed{} + \boxed{} = \boxed{}$$

3)



$$\boxed{} + \boxed{} = \boxed{}$$

4)



$$\boxed{} + \boxed{} = \boxed{}$$