




Addition

Number Sentence with Pictures


Count the stars in each group. Write the number in the box and write the sum in the last box.

1)




$$\square + \square = \square$$

2)



$$\square + \square = \square$$

3)



$$\square + \square = \square$$

4)



$$\square + \square = \square$$