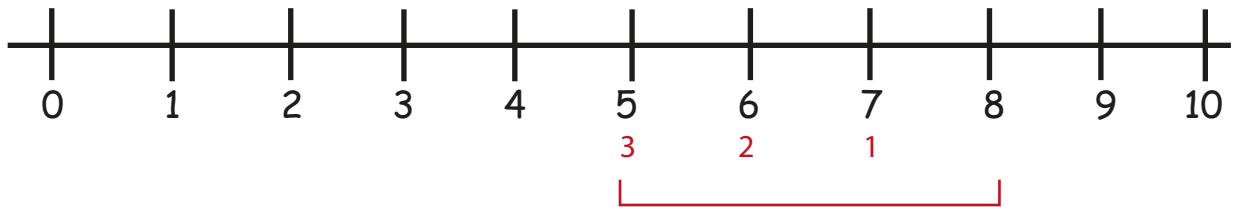




Subtraction

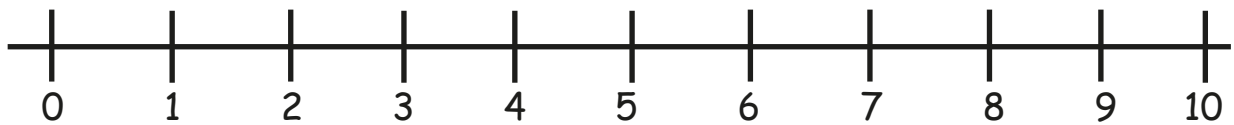
Word Problem with Number Line

1) Sally had 8 marbles. She gave away 3 marbles to her friend. How many marbles does Sally have left?



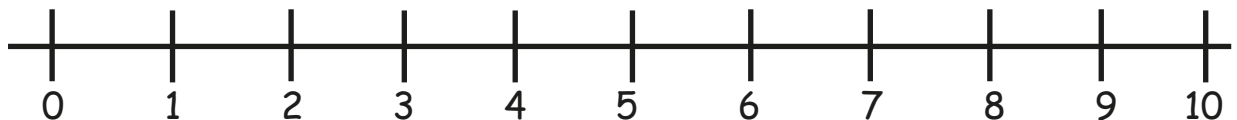
$$\boxed{8} - \boxed{3} = \boxed{5}$$

2) There were 7 apples in a basket. 1 apple was taken out. How many apples are left in the basket?



$$\boxed{} - \boxed{} = \boxed{}$$

3) Sam had 6 toy cars. He lost 4 of them. How many toy cars does Sam have now?



$$\boxed{} - \boxed{} = \boxed{}$$