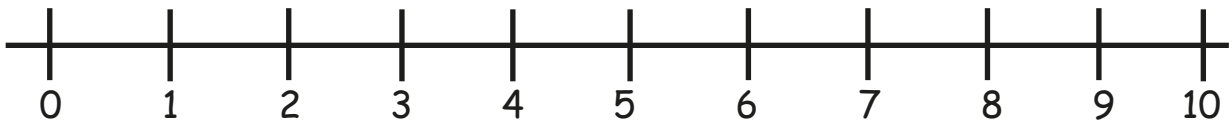




Subtraction

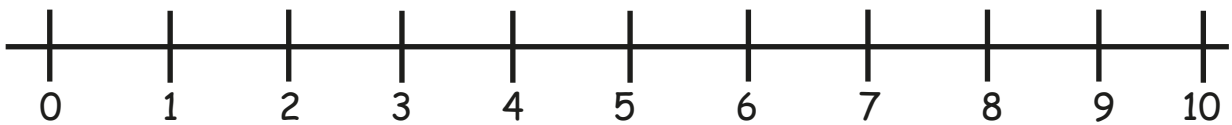
Word Problem with Number Line

1) There were 9 balloons at the party. 7 balloons popped. How many balloons are still there?



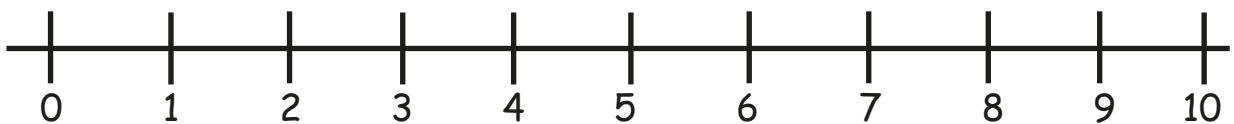
$$\square - \square = \square$$

2) Jenny had 5 candies. She ate 2 candies. How many candies does Jenny have left?



$$\square - \square = \square$$

3) Sarah had 10 crayons. She gave 3 crayons to her sister. How many crayons does Sarah have now?



$$\square - \square = \square$$