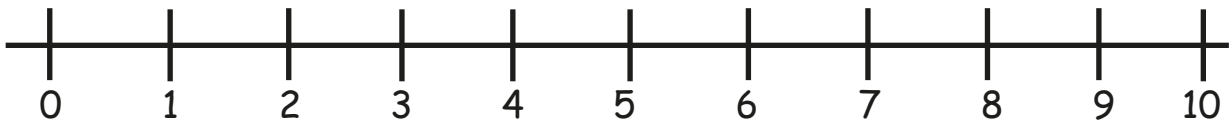




Subtraction

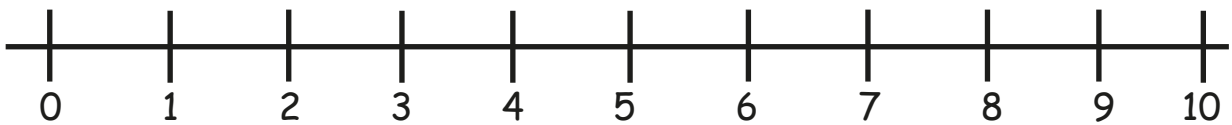
Word Problem with Number Line

1) Mike had 9 stickers. He lost 5 stickers. How many stickers does Mike have now?



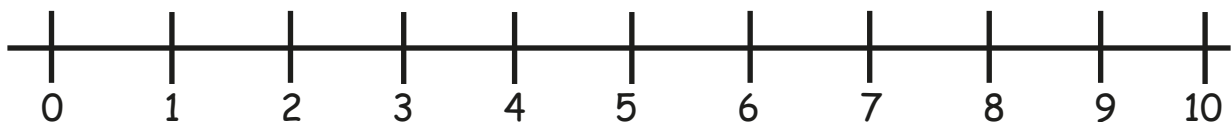
$$\square - \square = \square$$

2) There were 8 bananas on the table. 2 bananas were eaten. How many bananas are left?



$$\square - \square = \square$$

3) 5 puppies were in the park. 1 puppy went home. How many puppies are left in the park?



$$\square - \square = \square$$