


Name :

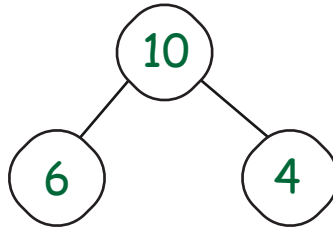
Date :

Addition Word Problems to Solve the Number Bonds to 10

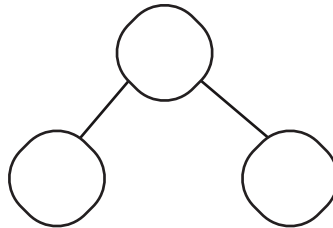


Carefully read the word problems and write the additions to the number bonds.

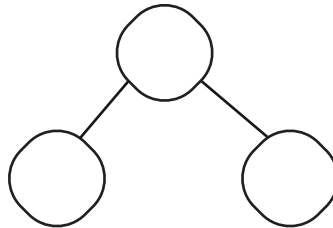
1. Sarah has some red apples and some green apples. She has a total of 10 apples. If she has 6 red apples, how many green apples does she have?



2. There are 7 butterflies fluttering in the garden. How many more butterflies are needed to make a total of 10 butterflies?



3. John has 4 toy cars. If he gets some more toy cars and now has a total of 10, how many more toy cars did he get?



4. There are 8 birds sitting on a fence. How many more birds are needed to make a total of 10 birds?

