


Name :

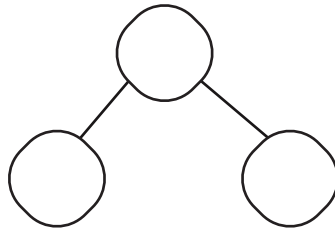
Date :

## Addition Word Problems to Solve the Number Bonds to 10

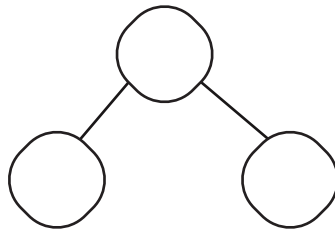


Carefully read the word problems and write the additions to the number bonds.

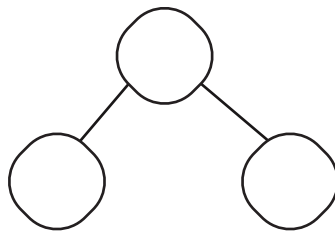
1. Lucy has 9 stickers. If she wants to have 10 stickers in total, how many more stickers does she need?



2. Tom has 4 cookies. How many more cookies does he need to have 10 cookies?



3. There are 6 fish in the tank. How many more fish are needed to make a total of 10 fish?



4. Archie has 7 stickers. If she receives 3 more stickers as a gift, how many stickers will she have in total?

