


Name :

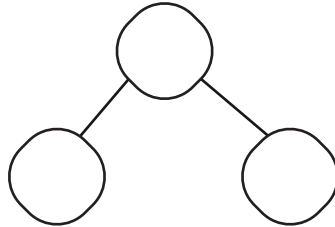
Date :

## Addition Word Problems to Solve the Number Bonds to 10

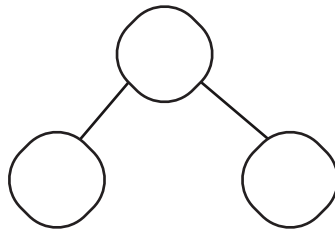


Carefully read the word problems and write the additions to the number bonds.

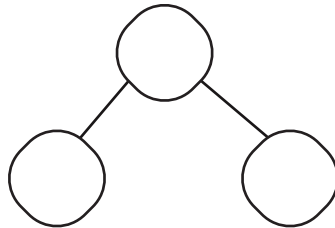
1. Michael has 4 baseball cards. If he trades for 5 more baseball cards, how many baseball cards will he have in total?



2. There are 9 flowers in the garden. How many more flowers are needed to make a total of 10?



3. There are 3 cupcakes on a plate. If 7 more cupcakes are added, how many cupcakes will be on the plate in total?



4. Emily has 8 markers. She finds 2 more markers on her desk. How many markers does Emily have now?

