

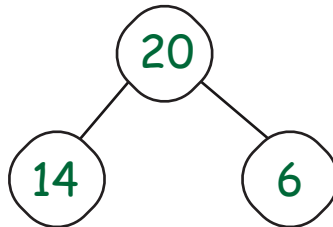
Name :

Date :

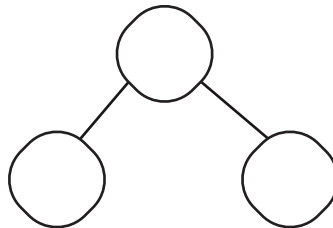
## Addition Word Problems to Solve the Number Bonds to 20

Add two random numbers and write down the total number in the given boxes.

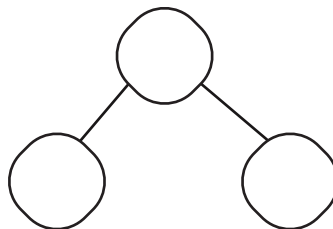
1. Emma has 14 candies. If she receives 6 more candies from her friend, how many candies will she have in total?



2. There are 17 balloons at the party. If 3 more balloons are added, how many balloons will there be in total?



3. James has 12 toy cars. If he receives 8 more toy cars as gifts, how many toy cars will he have in total?



4. There are 16 apples in a basket. How many more apples are needed to make a total of 20?

