

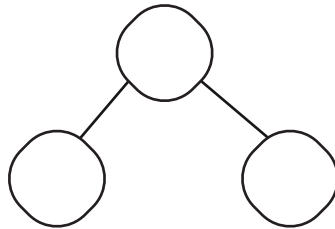
Name :

Date :

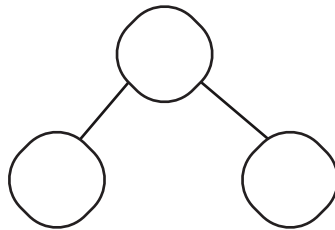
Addition Word Problems to Solve the Number Bonds to 20

Add two random numbers and write down the total number in the given boxes.

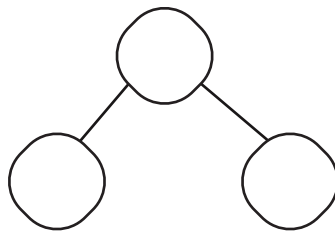
1. Marlo has 15 balls. If he finds 5 more balls in the playground, how many balls will Marlo have in total?



2. There are 18 pencils on the desk. If 2 pencils are taken away, how many pencils will be left on the desk?



3. Alex has 16 stickers. If he receives 4 more stickers as a gift, how many stickers will Alex have in total?



4. There are 19 students in the classroom. How many more students are needed to make a total of 20 students?

