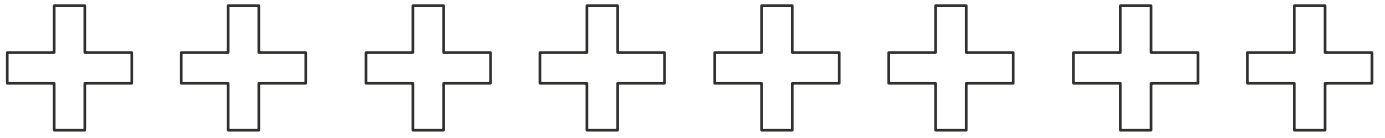


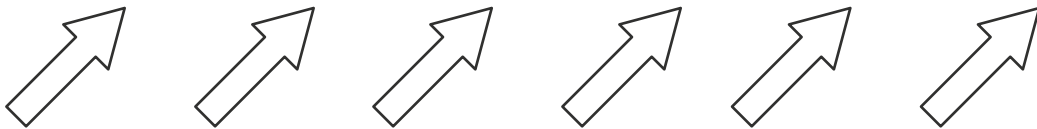
# Subtraction by Crossing out Using Shapes



$$8 - 3 = \underline{\quad}$$



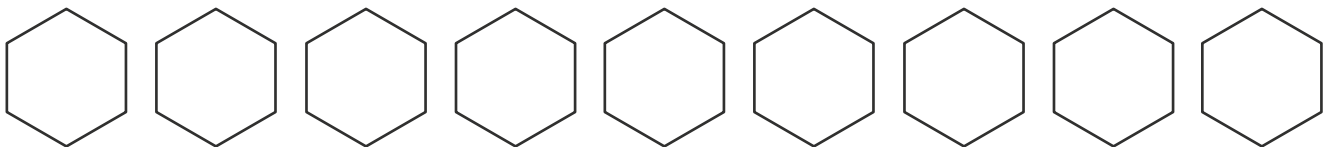
$$10 - 2 = \underline{\quad}$$



$$6 - 4 = \underline{\quad}$$



$$7 - 1 = \underline{\quad}$$



$$9 - 5 = \underline{\quad}$$