

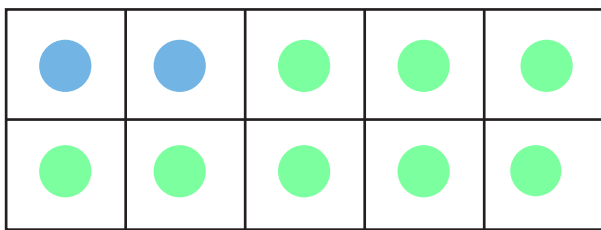
Date :

Name :

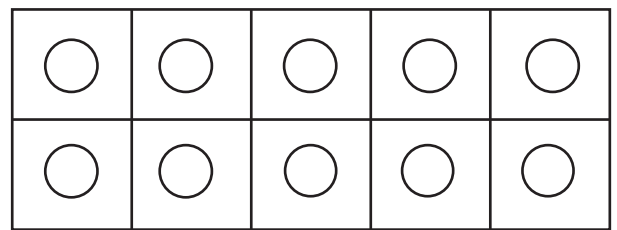
Coloring Elements for Making 10



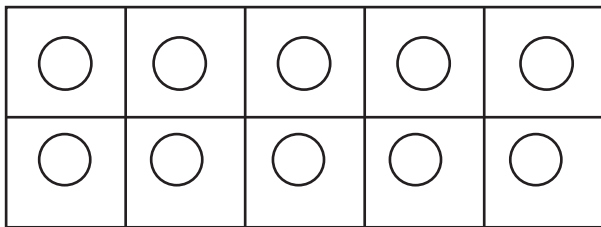
Use 2 different colors and color the counters to match the equations. Also find the missing addend.



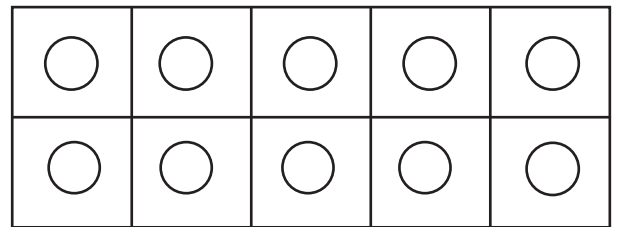
$$2 + \underline{8} = 10$$



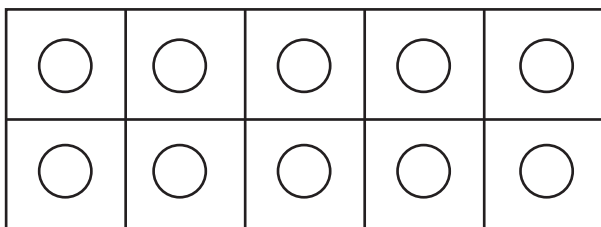
$$4 + \underline{\quad} = 10$$



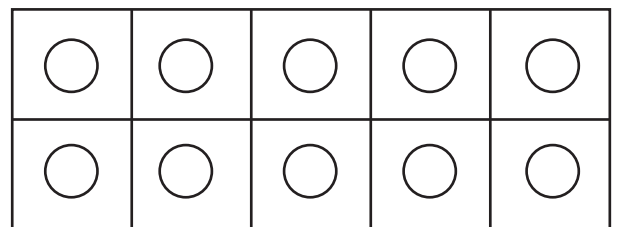
$$1 + \underline{\quad} = 10$$



$$10 + \underline{\quad} = 10$$



$$\underline{\quad} + 5 = 10$$



$$\underline{\quad} + 3 = 10$$

