


Date :

Name :

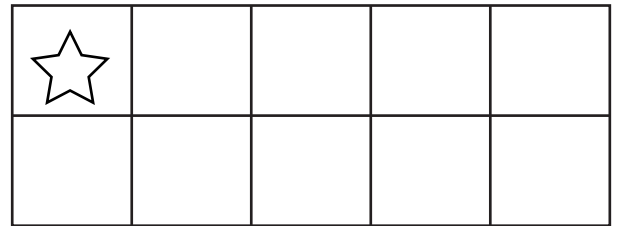
Drawing Missing Objects for Making 10




Draw the missing objects and also write the missing addends to match the equation.



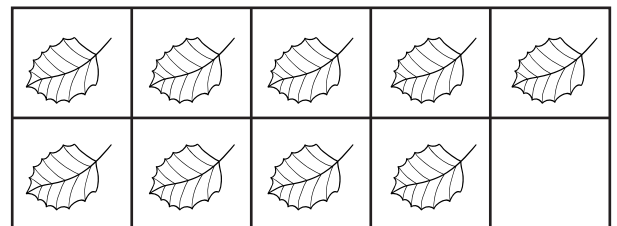
$$\underline{2} + \underline{8} = 10$$




$$\underline{\quad} + \underline{\quad} = 10$$




$$\underline{\quad} + \underline{\quad} = 10$$



$$\underline{\quad} + \underline{\quad} = 10$$



$$\underline{\quad} + \underline{\quad} = 10$$



$$\underline{\quad} + \underline{\quad} = 10$$

