

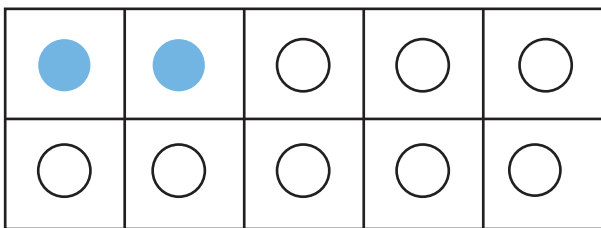
Date :

Name :

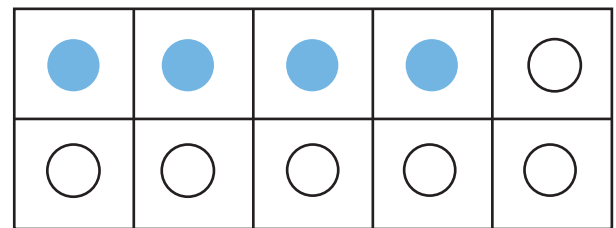
Finding Single Addend to Make 10



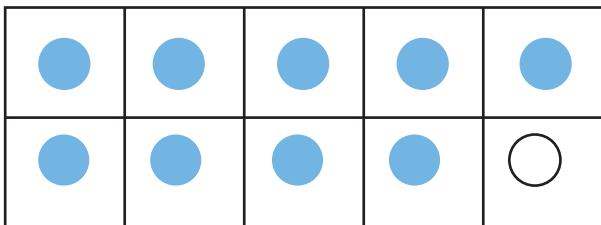
Count the blue and white counters in each frame to find the missing addend, where the white counters indicate the missing numbers.



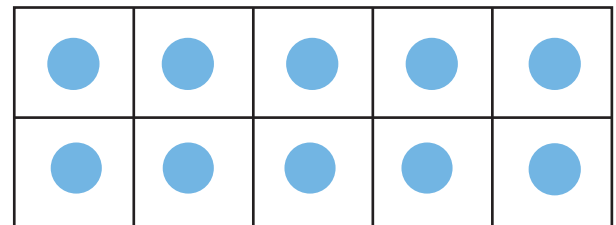
$$2 + \underline{\quad} = 10$$



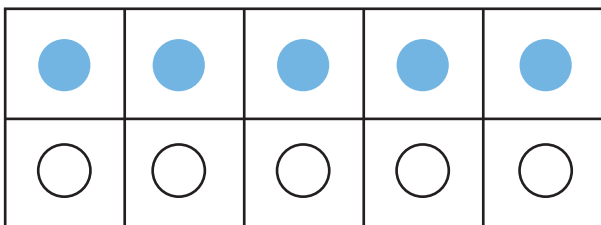
$$4 + \underline{\quad} = 10$$



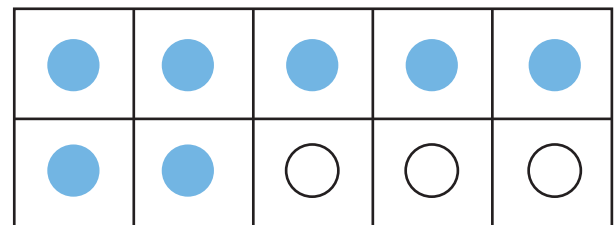
$$1 + \underline{\quad} = 10$$



$$10 + \underline{\quad} = 10$$



$$\underline{\quad} + 5 = 10$$



$$\underline{\quad} + 3 = 10$$

