

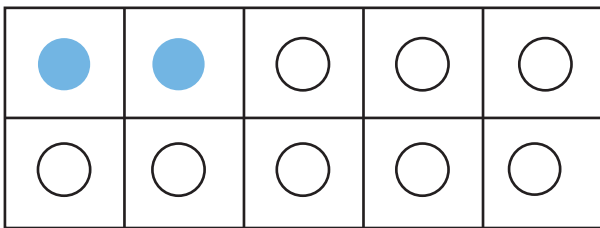
Date :

Name :

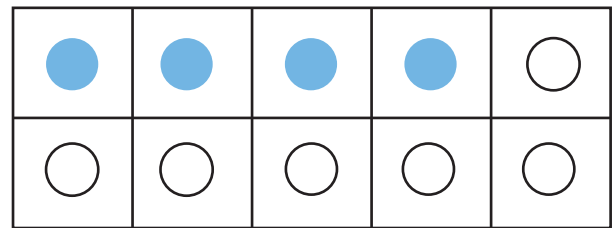
# Finding Single Addend to Make 10



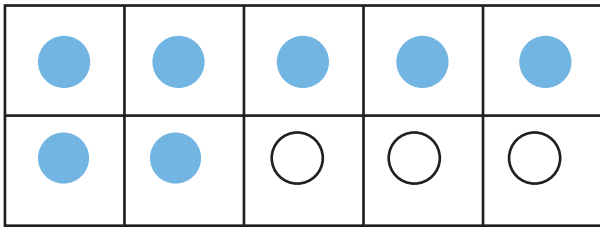
Count the blue and white counters in each frame to find the missing addend, where the white counters indicate the missing numbers.



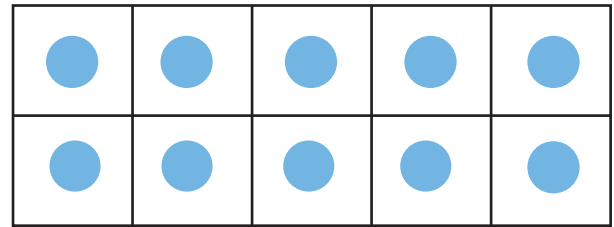
$$\underline{\quad} + 2 = 10$$



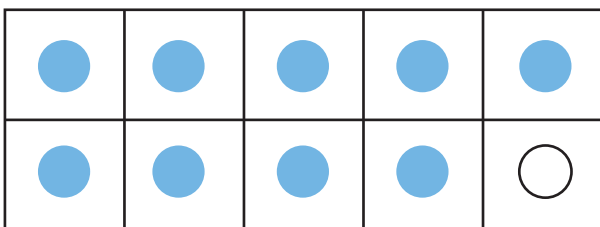
$$\underline{\quad} + 4 = 10$$



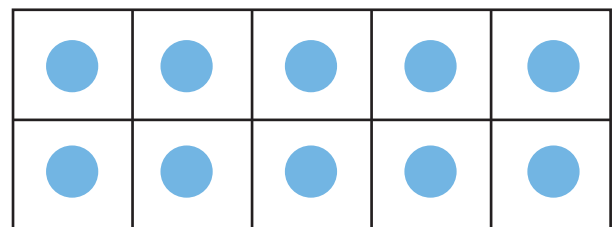
$$\underline{\quad} + 7 = 10$$



$$\underline{\quad} + 10 = 10$$



$$\underline{\quad} + 9 = 10$$



$$\underline{\quad} + 0 = 10$$

