

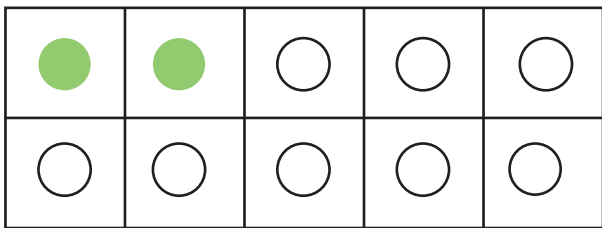
Date :

Name :

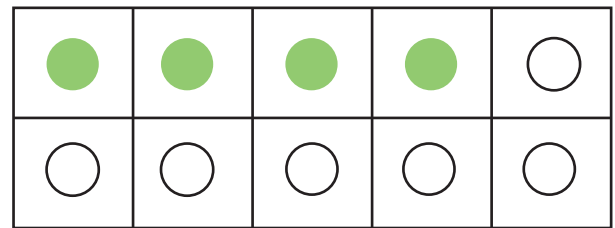
# Finding Both Addends to Make 10



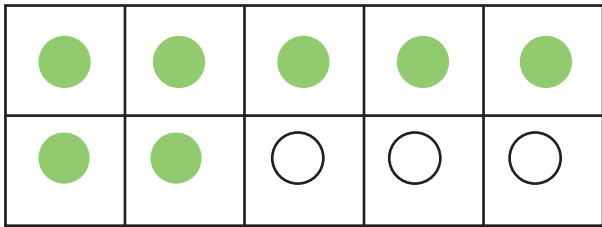
Count green and white counters in each frame to find both missing addends.



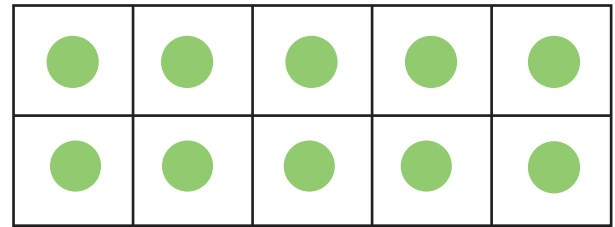
$$\underline{2} + \underline{8} = 10$$



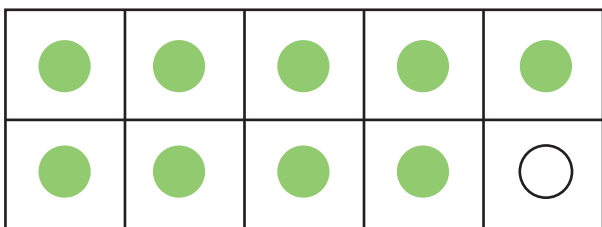
$$\underline{\quad} + \underline{\quad} = 10$$



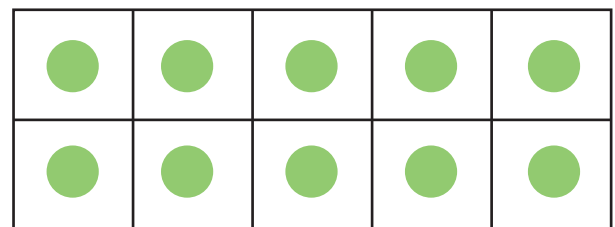
$$\underline{\quad} + \underline{\quad} = 10$$



$$\underline{\quad} + \underline{\quad} = 10$$



$$\underline{\quad} + \underline{\quad} = 10$$



$$\underline{\quad} + \underline{\quad} = 10$$

